



DHA EDUCATION SYSTEM

Junior Section



DHAI EDUCATION SYSTEM

Junior Section

GRADE 2(Home Assignment)	
English	<p>Topic: Creative Writing (My Hobby) Comprehension paragraph and 2 grammar worksheets (noun/verbs/adjectives and preposition of place) are given. Vocabulary words are also provided in the end of English worksheets.</p>
Math	<p>Topic: Fractions (2 fraction worksheets are given) Topic: Length (worksheets on length are given) Topic: Mass (worksheets are given) Students will revise table of 4, 5 and 10.</p>
Science	<p>Topic: Different parts of the plant (students will observe different parts of the plant and then they will mention their names on the given worksheet.) Topic: Float and sink experiment (children will be provided with 3 different brands of cookies e-g Oreo, chocolate chip and tuck and they will dunk them into the milk in order to observe which of them will float or sink) Topic: The best liquid for growing seeds experiment: students will explore how water supports the growth of a plant. They will plant seeds and water them with a variety of liquids to see which sprout first and grow best.</p>
Urdu	<p>* ایک کتابچہ بنائیے : -</p> <p>جملہ سازی : _____ (سردرد، زکام، کھانسی، بخار، بیمار) ان الفاظ کے جملے بنائیے۔ ان ہی الفاظ کے توڑ بھی لکھیے۔</p> <p>مضمون سازی : "نزلہ /زکام" کے بارے میں مضمون لکھیے اور ان سے بجاؤ کی تدابیر بھی لکھیں اور ان سے متعلق تصاویر بھی چسپاں کریں۔</p>



DHAI EDUCATION SYSTEM
English Grade 2



Name: -----

Date: -----

Comprehension

Q4: Read the given passage and Answer the questions.

Sea turtles live in warm oceans. They are slow on land. But they are fast swimmers .Some can swim 9 kilometers in an hour. They carry shells on their back .They eat grass, jellyfish and crabs. They can live for 100 years. They are interesting animals.

Complete the following sentences:

a) Where do sea turtles live?

b) How far sea turtles can swim?

c) What do sea turtles eat?

d) How long do sea turtles live?



DHAI EDUCATION SYSTEM
English Grade 2

Name: -----

Date: -----

Topic: Nouns, Verbs and Adjectives

Circle the nouns, draw a box around the verbs and underline the adjectives in each sentence.

1. The pink dress has too many pockets
2. My little brother won the race.
3. We should eat at the Pakistani restaurant today.
4. My old sweater is very comfortable.
5. Emma adores her Black cat.
6. Fluffy pancakes taste the best.
7. Tall kids must stand at the back of the line.
8. Our new sofa looks great in our living room.
9. Huma asked her big sister to drive her to the park
10. Thomas is scared of big dogs.

Name:

Date:

Look at the picture .Fill in the blanks with correct preposition from the box.

At	on	in	near	behind	under
----	----	----	------	--------	-------



1. The cat is _____ the table.
2. The mouse is _____ the table.
3. There is a bowl _____ the table.
4. The mouse _____ the bowl
5. There is cheese _____ the bowl.
6. The dog is _____ the door.
7. The dog is hiding _____ the door.



DHAI EDUCATION SYSTEM
Math Grade 2

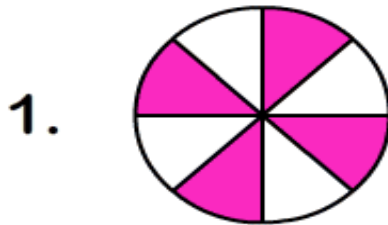


Name:

Date:

Topic: Fractions


Circle the correct fraction from the given choices.



$$\frac{3}{6}$$

$$\frac{3}{5}$$

$$\frac{4}{8}$$



$$\frac{4}{5}$$

$$\frac{1}{3}$$


$$\frac{3}{4}$$



$$\frac{5}{6}$$

$$\frac{3}{7}$$

$$\frac{1}{8}$$



$$\frac{2}{7}$$

$$\frac{4}{8}$$

$$\frac{3}{6}$$

DHAI EDUCATION SYSTEM

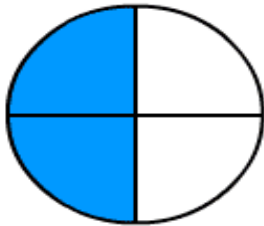
Math Grade 2

Name:

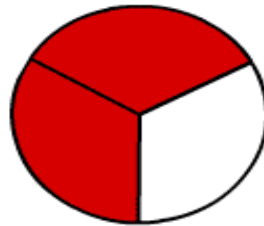
Date:

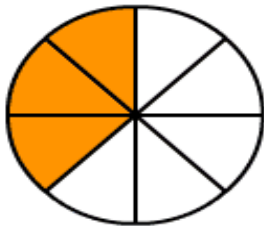
Topic: Fractions

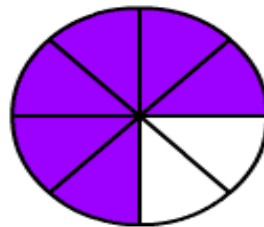
What fraction does the colored part show?

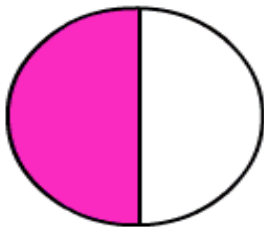


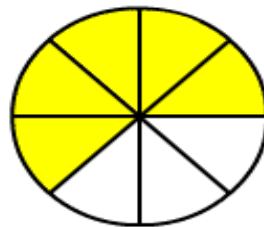
$\frac{2}{4}$













DHAI EDUCATION SYSTEM

Math Grade 2

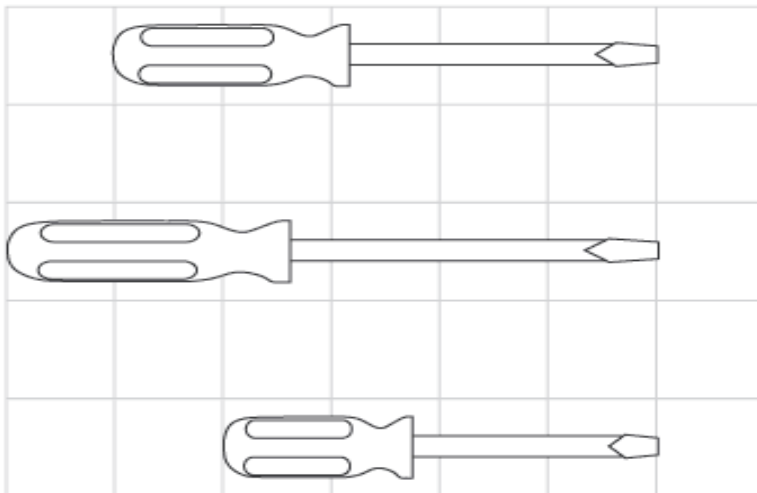
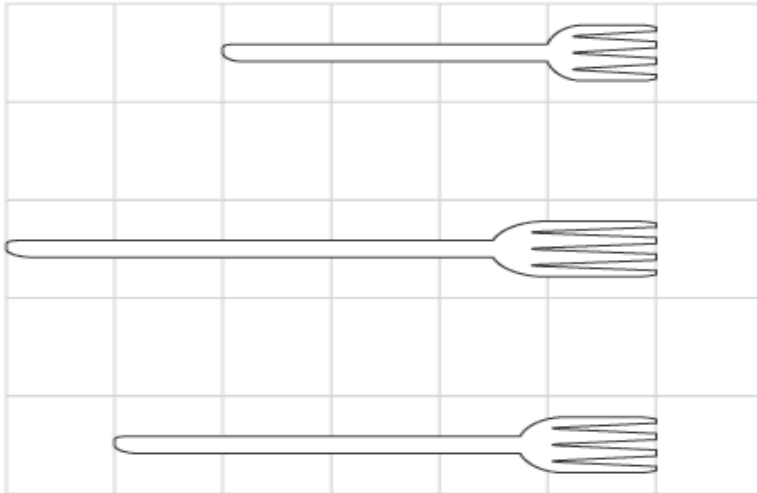
Name:

Date:

Topic: Length

Long, longer, longest

For each set, fill in long, longer and longest



DHAI EDUCATION SYSTEM

Math Grade 2

Name:

Date:

Topic: Length

Measurement Mania: TIME TO REVIEW

How many inches is the pencil? _____



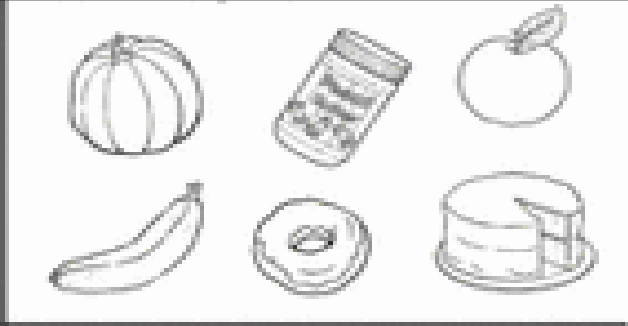
How many inches is the match stick? _____




How many cm is the feather? _____



Circle all the objects that weight less than 1 pound?



Circle all the objects that weight more than 1 pound?



DHAI EDUCATION SYSTEM

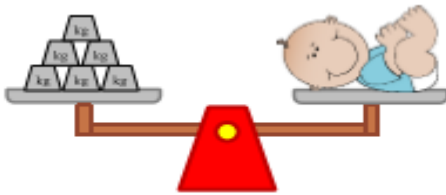
Math Grade 2

Name: -----

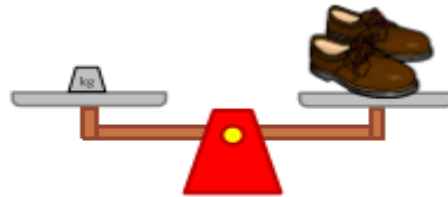
Date: -----

Topic: Mass

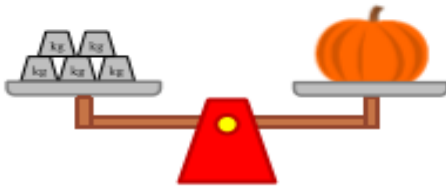
Measure weights with metric units (kilograms)



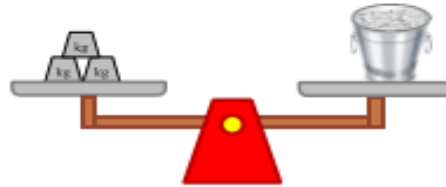
The baby weighs ____ kg.



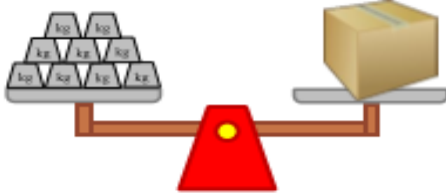
The pair of shoes weighs ____ kg.



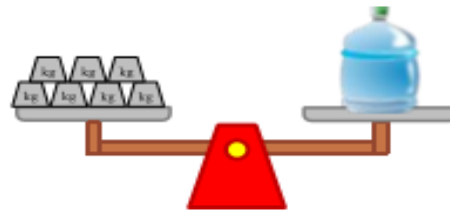
The pumpkin weighs ____ kg.



The ice bucket weighs ____ kg.



The box weighs ____ kg.



The water bottle weighs ____ kg.

Which object is the heaviest? _____

Which object is the lightest? _____

DHAI EDUCATION SYSTEM
Science Grade 2


Name:

Date:

Topic: Parts of the plant

Name the different parts of a plant

Choose the correct word from the bottom of the page to name each part of the plant



stem flower root bud leaf



DHAI EDUCATION SYSTEM Science Grade 2

Name: -----

Date: -----

Topic: The best water for growing plants experiment

Instructions: students will explore how water supports the growth of a plant. They will plant seeds and water them with a variety of liquids to see which sprout first and grow best.



Type of water	Observations
Tap water	
Bottled water	
Sugar water	
Salt water	

Final Result:

DHAI EDUCATION SYSTEM

Science Grade 2

Name:

Date:


Topic: Sink or float experiment

Instructions: Children will be provided with 3 different brands of cookies e-g oreo, chocolate chip and tuc and they will dunk them into the milk in order to observe which one of them will float or sink.

Science Investigation

Mr. Brown's Milk and Cookies



Do cookies sink or float in milk?			
Cookie	My Prediction	Sink	Float
			
			
			

THOUGHT OF THE WEEK

“If you have good thoughts they will shine out of
your face like

sunbeams and you will always look lovely.” –

Roald Dahl”

